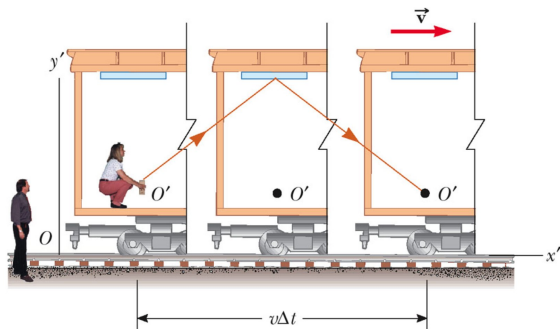




You're on a long train back to Richmond from fall break. You're in the last car in the train and you get up to get a drink from the club car. The speed of the train is  $\vec{v}_t$ . Your speed walking up the middle of the train is  $\vec{v}_p$ . What is your velocity?

# Riding the Train

You're on a long train back to Richmond from fall break. You're in the last car in the train and you get up to get a drink from the club car. The speed of the train is  $\vec{v}_t$ . Your speed walking up the middle of the train is  $\vec{v}_p$ . What is your velocity?



## Galilean Transformations

$$x' = x - vt$$

$$y' = y$$

$$z' = z$$

$$t' = t$$

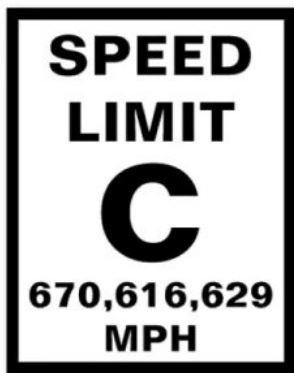
$$v'_x = v_x - v_O$$

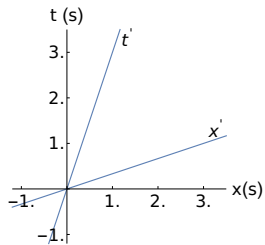
$$v'_y = v_y$$

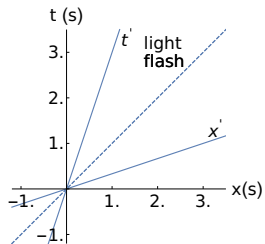
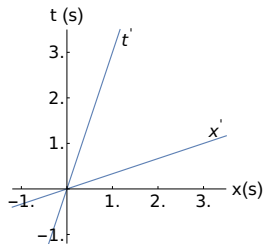
$$v'_z = v_z$$

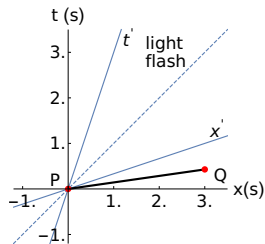
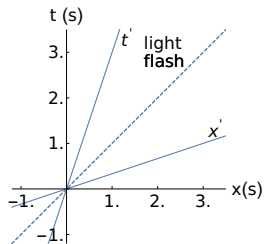
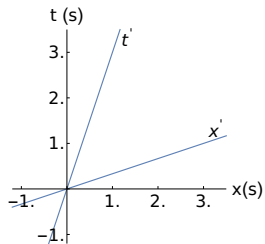
A large armada of Federation spaceships moves with a speed  $0.95c$  away from the nearby Kronos system. A scout ship launched from the trailing ship in the armada moves at a speed  $0.7c$  relative to its mother ship towards the front of the fleet. The scout ship's speed is measured relative to the fleet. What is the speed of the scout ship as measured on Kronos?







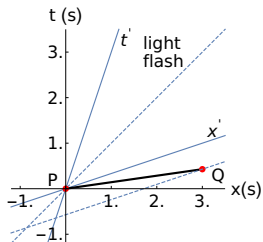
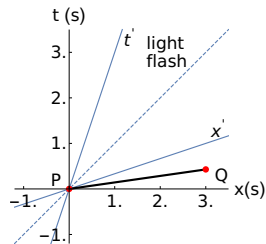
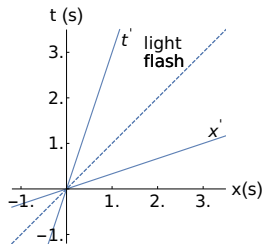
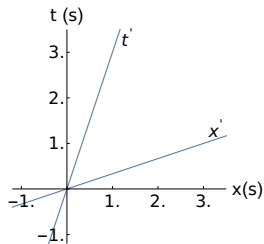


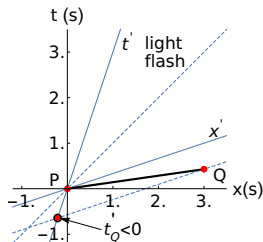
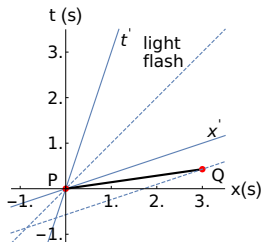
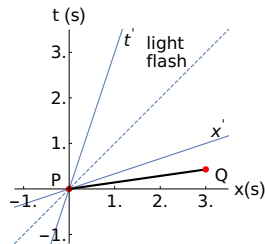
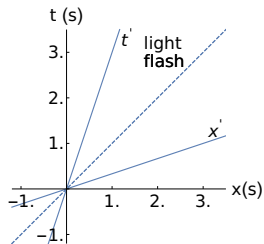
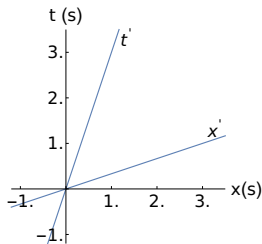




# Stop! In the name of Einstein!

9



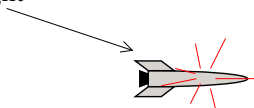


A spaceship (Observer 1 in the figure) is moving away from an Earth-bound observer (0) at a high speed  $v_0$  as measured by Observer 0. It emits a periodic light pulse the observer on the Earth (0) detects. The time between pulses measured by Observer 1 is  $\Delta t_1$ . The time between pulses measured by Observer 0 is  $\Delta t_0$ . How is  $\Delta t_0$  related to  $\Delta t_1$ ?



Observer 0

Spaceship with pulsing light

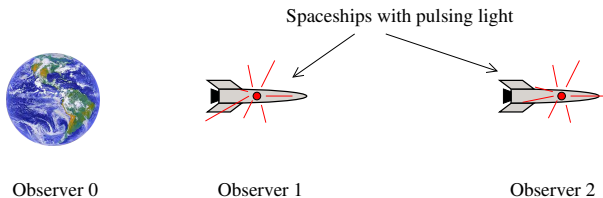


Observer 1

Two spaceships (1 and 2 in the figure) are moving away from an Earth-bound observer (0) at different speeds. The fast, lead ship (2) emits a periodic light pulse the observer on the second, slow ship (1) receives and immediately relays to Earth (0). The speeds and time intervals are defined below.

|                           |                                   |
|---------------------------|-----------------------------------|
| $v_0$ : speed of 1 from 0 | $\Delta t_0$ : time interval on 0 |
| $v_1$ : speed of 2 from 1 | $\Delta t_1$ : time interval on 1 |
|                           | $\Delta t_2$ : time interval on 2 |
| $v_2$ : speed of 2 from 0 |                                   |

- ① How is  $\Delta t_0$  related to  $\Delta t_1$ ?
- ② How is  $\Delta t_1$  related to  $\Delta t_2$ ?
- ③ How is  $\Delta t_0$  related to  $\Delta t_2$ ?
- ④ What is  $v_2$  in terms of  $v_0$  and  $v_1$ ?



A large armada of Federation spaceships moves with a speed  $0.95c$  relative to the nearby Kronos system. A scout ship launched from the trailing ship in the armada moves at a speed  $0.7c$  towards the front of the fleet. The scout ship's speed is measured relative to the fleet. What is the speed of the scout ship as measured on Kronos?



2511

[HTTP://EVILGENIUS188.WORDPRESS.COM](http://evilgenius188.wordpress.com)

CHRIS MARTIN