


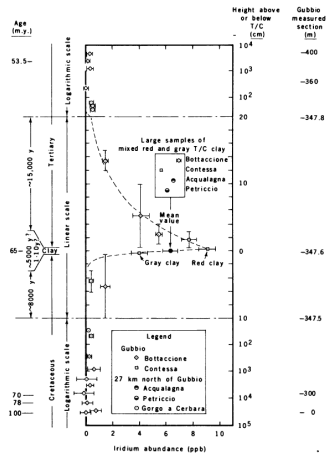
What Happened to the Dinosaurs?

1

Dinosaurs were the dominant vertebrate animals of terrestrial ecosystems for over 160 million years from about 230 million years ago to 65 million years ago. Recent research indicates that theropod dinosaurs are most likely the ancestors of birds and many were active animals with elevated metabolisms often with adaptations for social interactions. What caused them to largely disappear?



- 1 The dinosaurs disappeared at the boundary between the Cretaceous and Tertiary Periods (the KT Boundary) about 65 million years ago.
- 2 The data in the figure shows the abundance of the atom iridium which is commonly found in meteorites and not on Earth. The horizontal axis is the iridium abundance and the vertical axis is the age of the sample with increasing age going down.
- 3 The large peak in the iridium abundance implies a large infusion of the atom coincident with the KT boundary. This peak was observed in rocks from Italy, Denmark, and New Zealand.




L.W.Alvarez, W.Alvarez, F.Asaro, H.V.Michel, *Science*, “Extraterrestrial Cause for the Cretaceous-Tertiary Extinction”, 208 (1980) 1095.

- ① An impact crater of the right size and age has been found on the Yucatan Peninsula in Mexico showing signs of shocked crystals and melted rock.
- ② There is abundant evidence of other **cataclysmic collisions** with Solar System debris.
- ③ Frequency of **impacts**:

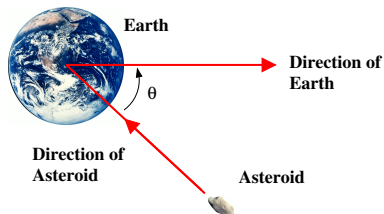


Pea-size	mete-	10 per hour
oroids		
Walnut-size		1 per hour
Grapefruit-size		1 every 10 hours
Basketball-size		1 per month
50-m rock		1 per 100 years
1-km asteroid		1 per 100,000 years
2-km asteroid		1 per 500,000 years



It is now believed the dinosaurs and many other species were driven to extinction 65 million years ago by an ecological disaster brought on by the collision of an asteroid with the Earth. Consider the following scenario. The asteroid collides with the Earth as the Earth orbits the Sun and sticks to the surface as shown in the figure (a perfectly inelastic collision). How much does the velocity of the Earth change? How much energy is released in the collision? How does this compare with the energy released by the Hiroshima atomic bomb ($6.8 \times 10^{13} \text{ J}$)?

Asteroid mass: $m_A = 3.4 \times 10^{14} \text{ kg}$
Asteroid speed: $v_A = 2.5 \times 10^5 \text{ m/s}$
Asteroid size: 10 km
Earth mass: $m_E = 6.0 \times 10^{24} \text{ kg}$
Earth speed: $v_E = 3.0 \times 10^4 \text{ m/s}$
Angle: $\theta = 30^\circ$




- 1 Consider a body with no net force acting on it. If it is at rest it will remain at rest. If it is moving with a constant velocity it will continue to move at that velocity.
- 2 For all the different forces acting on a body

$$\Sigma \vec{F}_i = m\vec{a}$$

- 3 For every action there is an equal and opposite reaction.

$$\vec{F}_{AB} = -\vec{F}_{BA}$$



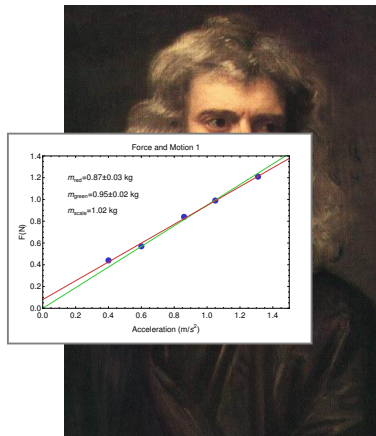
- 1 Consider a body with no net force acting on it. If it is at rest it will remain at rest. If it is moving with a constant velocity it will continue to move at that velocity.

- 2 For all the different forces acting on a body

$$\Sigma \vec{F}_i = m\vec{a}$$

- 3 For every action there is an equal and opposite reaction.


$$\vec{F}_{AB} = -\vec{F}_{BA}$$



The Simplified Aid For EVA Rescue (SAFER) is a jetpack used to recover International Space Station (ISS) astronauts in the event of a “man/woman overboard”. Astronauts are usually connected to the ISS by a tether, but if an astronaut becomes untethered and floats away, SAFER would fly back to the station. It uses small nitrogen-gas-jet thrusters. The SAFER carries a mass of nitrogen $m_n = 1.4 \text{ kg}$ which is ejected at a speed $v_n = 440 \text{ m/s}$. The total mass of the astronaut and spacesuit at the start of an EVA is $m_{ss} = 205 \text{ kg}$. If the astronaut is a kilometer away from the ISS with 10 minutes of oxygen left, will the SAFER get them back to the ISS in time?

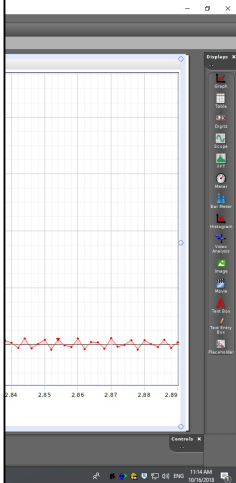
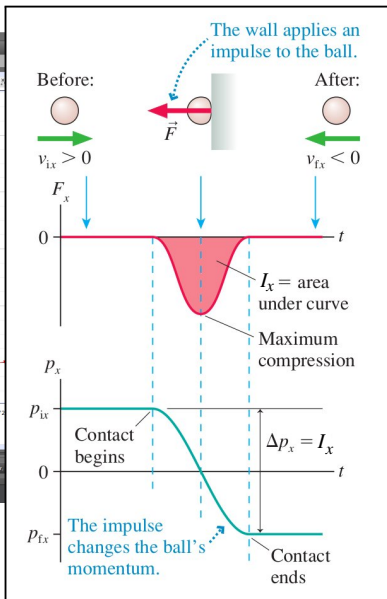


Astronaut Mark Lee tests SAFER on STS-64.



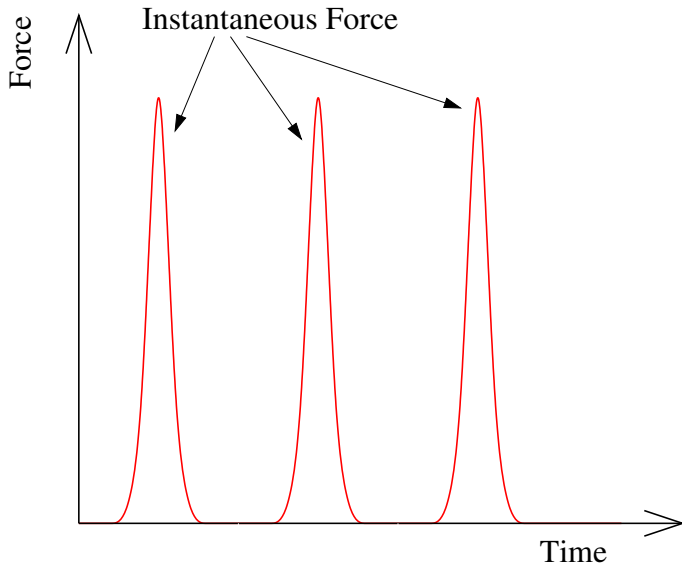
SAFER backpack.

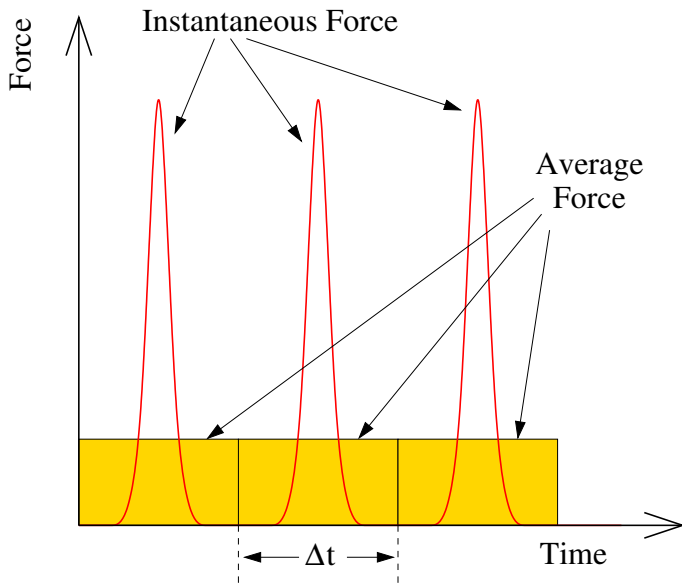




It is well known that bullets fired at Superman simply bounce off his chest. Suppose a Mafia hit man sprays Superman's chest with bullets of mass $m_b = 25.0 \text{ g}$ at a rate $R = 100 \text{ bullets}/\text{min}$. The speed of each bullet is $v_b = 1500 \text{ m/s}$. These are roughly the parameters of a 44-Magnum pistol. Suppose further the bullets bounce straight back with no loss in speed. Find the impulse delivered by each bullet and the average force exerted on Superman.






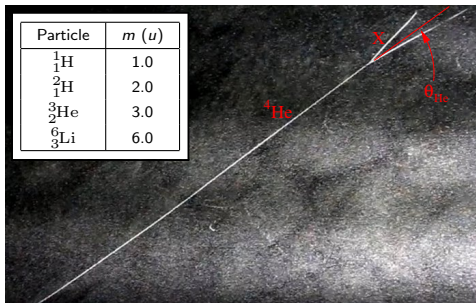



In a nuclear reactor heavy atomic nuclei like uranium are irradiated with neutrons which cause them to split apart ('to fission'); releasing energy that can be used to make electricity. A byproduct of the fission is more neutrons that can cause further fissions and energy release. However, these neutrons usually have too much kinetic energy so they have to be slowed down ('moderated') by making them collide with some surrounding material.

One of these too-fast neutrons ($m_n = 1 u$) makes an elastic, head-on collision with the nucleus of a carbon atom ($m_c = 12 u$) at rest. The initial kinetic energy of the neutron is $E_0 = 1 \text{ MeV}$. What fraction of the neutron's energy remains after the collision? The neutrons are all going fast enough that we can safely ignore any potential energy relative to their kinetic energy.

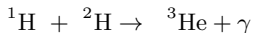


Nuclear collisions are useful diagnostic tools to identify components of a material. In the picture to the left below, an accelerator at the Louvre in Paris is used to study the properties of a painting you might recognize for preservation and cultural purposes. A beam of ${}^4_2\text{He}$ nuclei (mass $m_{\text{He}} = 4.0 u$) is incident on the painting with a speed $v_0 = 4 \times 10^7 \text{ m/s}$ and scatter off a nucleus in the 'target'. The figure on the right shows a similar scattering event in a cloud chamber to help visualize what is happening. The scattered ${}^4_2\text{He}$ nucleus is observed at an angle $\theta_{\text{He}} = 8^\circ$ relative to its original direction and a speed $v_{\text{He}} = 2.4 \times 10^7 \text{ m/s}$. The recoiling particle (the other track in the picture) is found to have a velocity $v_X = 6.4 \times 10^7 \text{ m/s}$. What is the mass and direction of particle X? What is the particle? Some candidates are in the table. Assume elastic scattering.



Particle	$m (u)$
${}^1_1\text{H}$	1.0
${}^2_1\text{H}$	2.0
${}^3_2\text{He}$	3.0
${}^6_3\text{Li}$	6.0


The energy source for our Sun is a series of nuclear reactions that burn protons as fuel. One of the steps is

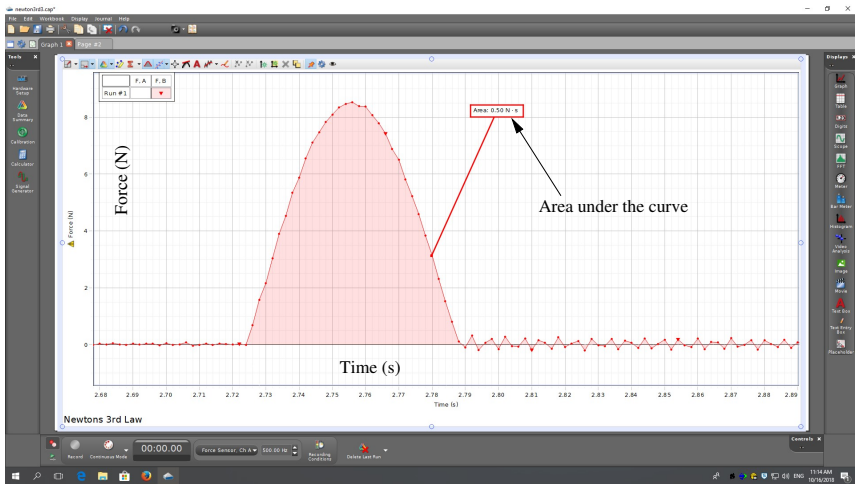


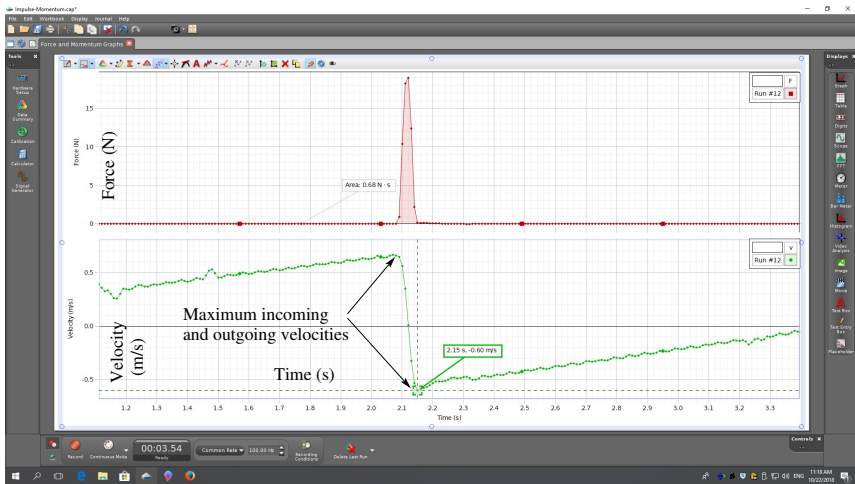
where γ is a photon, ${}^1\text{H}$ is a proton, ${}^3\text{He}$ is a helium-3 nucleus, and ${}^2\text{H}$ is a deuteron (consisting of a proton and a neutron). To occur, the proton and deuteron must touch so they have to approach within a distance $R = 2 \times 10^{-15} \text{ m}$. The potential energy is

$$PE = U(r) = \frac{ke^2}{r}$$

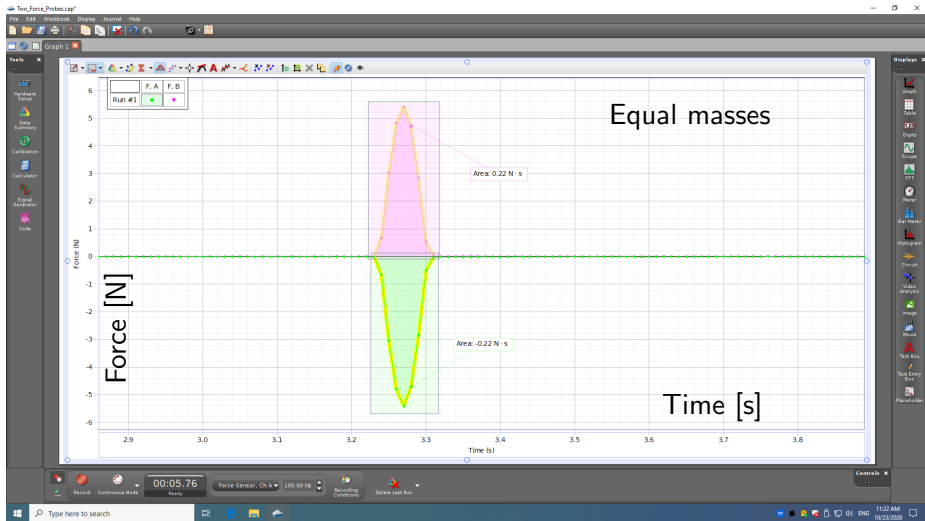
where r is their center-to-center separation, e is the electronic charge, and $k = 8.99 \times 10^9 \text{ Nm}^2/\text{C}^2$. Consider a proton and deuteron within the Sun that start very far from each other and then follow a head-on collision course with energies $E_1 = 2 \times 10^{-17} \text{ J}$ and $E_2 = 0$, respectively. Do they get close enough to touch?

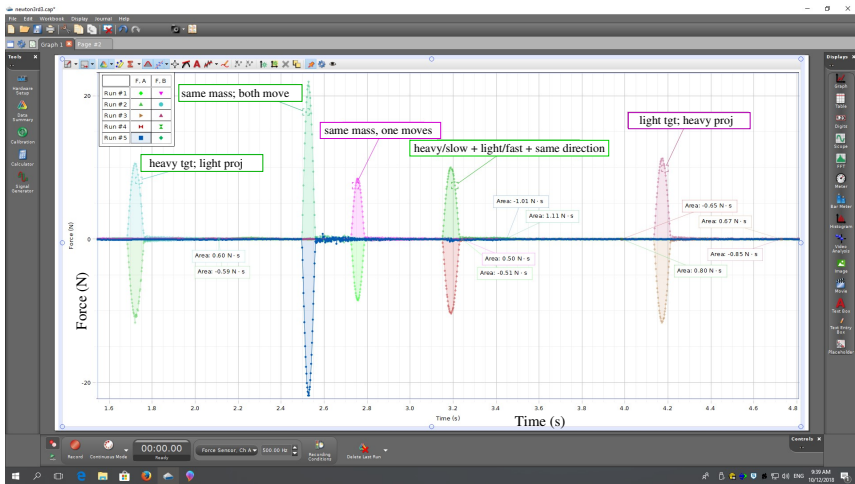


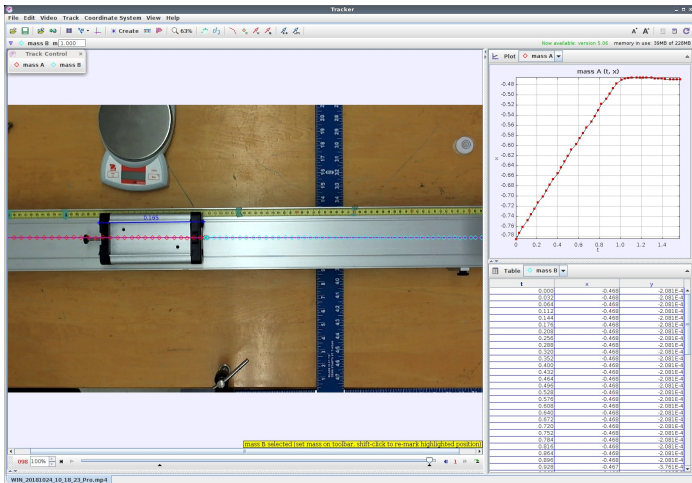


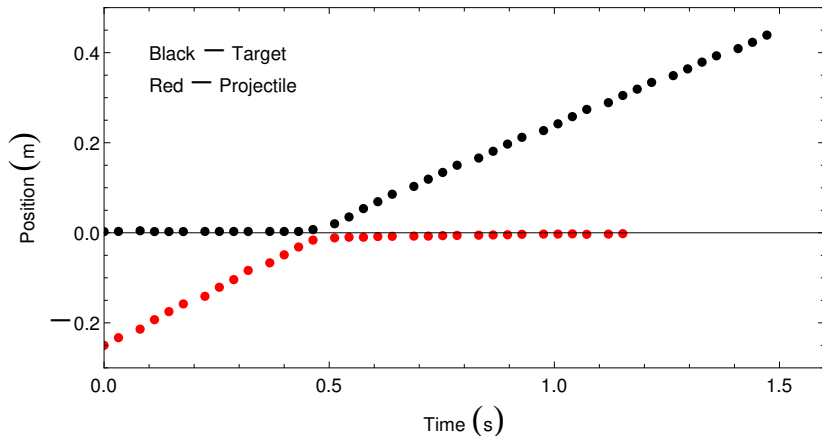


- 1 When you collide the carts use the magnetic repulsion to bounce the carts (not the spring-loaded plungers).
- 2 Be gentle.
- 3 In Activity 5.f extract $\Delta p = p_f - p_i$ and $\%Diff = (p_f - p_i)/\langle p \rangle$ from your data and compile your results with the rest of the class.
- 4 Take the video with the Capstone app.
 - 1 Open Phys131 folder.
 - 2 Double-click Video Capture.cap
 - 3 Click No to all the requests to add a Force Sensor.
 - 4 To record a video click the red circle in the upper-left corner of the Capstone gui.
 - 5 Click the same button as the previous step to stop recording.
 - 6 To save the video right-click the mouse when you hover over the video gui and select "Save Movie as ...".
- 5 Analyze with *Tracker*.









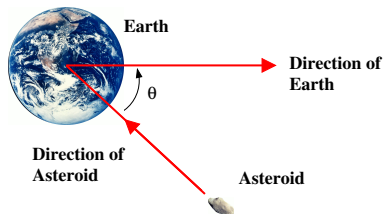
For the projectile: $p_i = mv_i = 0.52 \text{ kg} \times 0.51 \text{ m/s} = 0.26 \text{ kg} \cdot \text{m/s}$.

For the target: $p_f = mv_f = 0.52 \text{ kg} \times 0.43 \text{ m/s} = 0.23 \text{ kg} \cdot \text{m/s}$.

$$\frac{\Delta p}{\langle p \rangle} = 0.12$$

It is now believed the dinosaurs and many other species were driven to extinction 65 million years ago by an ecological disaster brought on by the collision of an asteroid with the Earth. Consider the following scenario. The asteroid collides with the Earth as the Earth orbits the Sun and sticks to the surface as shown in the figure (a perfectly inelastic collision). How much does the velocity of the Earth change? How much energy is released in the collision? How does this compare with the energy released by the Hiroshima atomic bomb ($6.8 \times 10^{13} \text{ J}$)?

Asteroid mass: $m_A = 3.4 \times 10^{14} \text{ kg}$
Asteroid speed: $v_A = 2.5 \times 10^5 \text{ m/s}$
Asteroid size: 10 km
Earth mass: $m_E = 6.0 \times 10^{24} \text{ kg}$
Earth speed: $v_E = 3.0 \times 10^4 \text{ m/s}$
Angle: $\theta = 30^\circ$





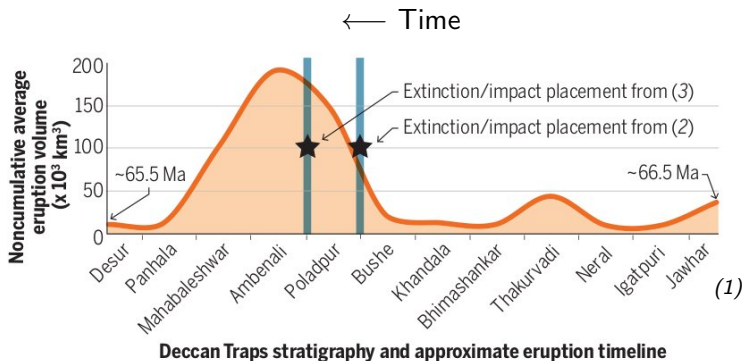
Effect of 5-km-wide asteroid striking the mid-Atlantic.

▶ Watch

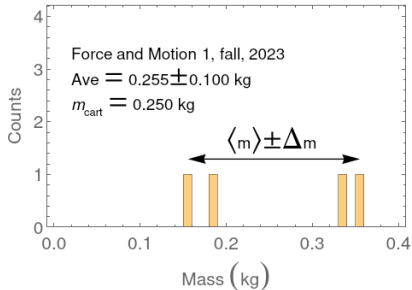
- 1 Megatsunamis as high as 5 kilometers (3.1 mi); enough to completely inundate even large islands such as Madagascar.
- 2 Excavated material along with pieces of the impactor, ejected out of the atmosphere by the blast, would have been heated to incandescence upon re-entry, broiling the Earth's surface and possibly igniting wildfires.
- 3 Colossal shock waves would have triggered global earthquakes and volcanic eruptions.
- 4 The emission of dust and particles could have covered the entire surface of the Earth for years, possibly a decade. Photosynthesis by plants would be interrupted, affecting the entire food chain.
- 5 Sunlight would have been blocked from reaching the surface of the earth by the dust particles in the atmosphere, cooling the surface dramatically.
- 6 It is estimated that 75% or more of all species on Earth vanished.

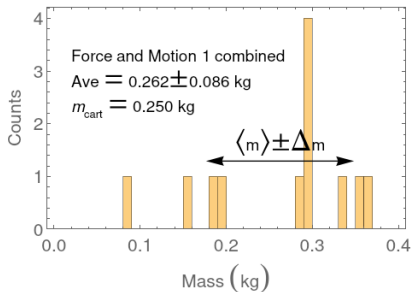
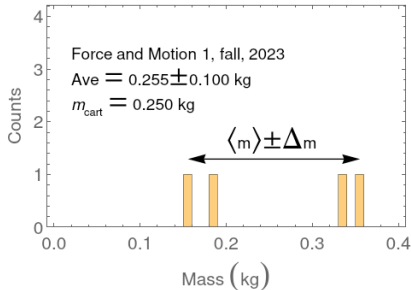
Event	Energy Released (J)	Fatalities
Hiroshima Atom Bomb (1945)	6.8×10^{13}	90,000-120,000 prompt
Nagasaki Atom Bomb (1945)	10.2×10^{13}	60,000-80,000 prompt
Tokyo fire raids (1945)	N/A	88,000-125,000 prompt
Soviet Nuclear Test (1961)	2.7×10^{17}	None (that we know of)
Krakatoa Volcano (1883)	6.9×10^{18}	36,000
Tambora Volcano (1815)	Unknown	92,000

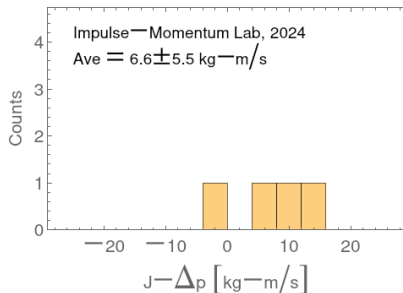


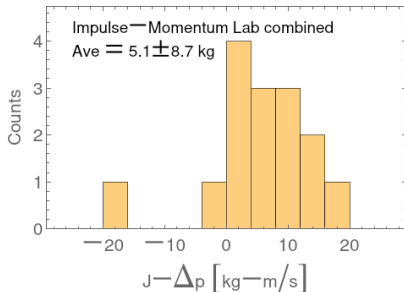
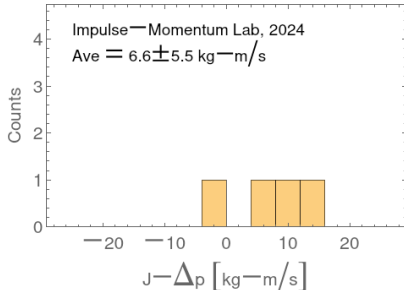


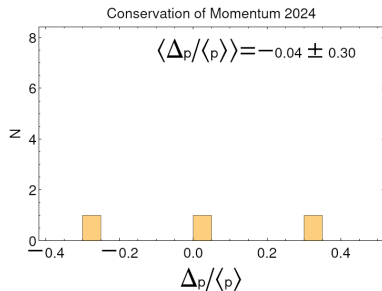
- ① S. Burgess, *Science*, **363**, 815 (2019).
- ② C. J. Sprain *et al.*, *Science* **363**, 866 (2019).
- ③ B. Schoene *et al.*, *Science* **363**, 862 (2019).

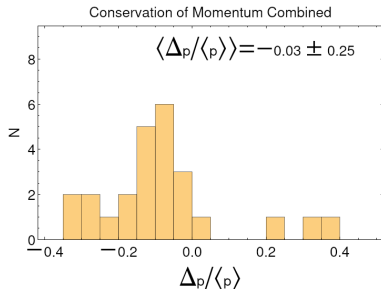
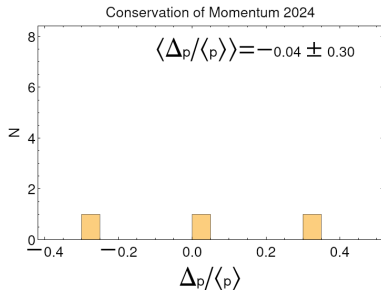


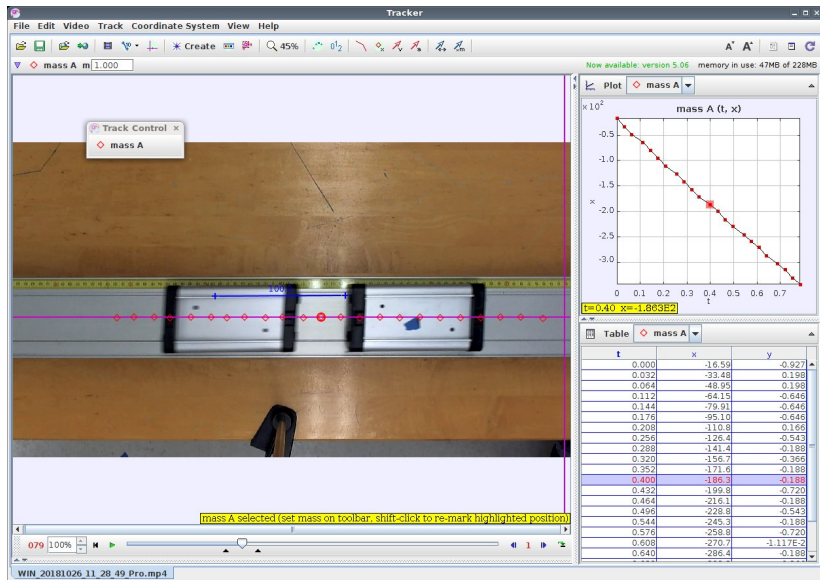


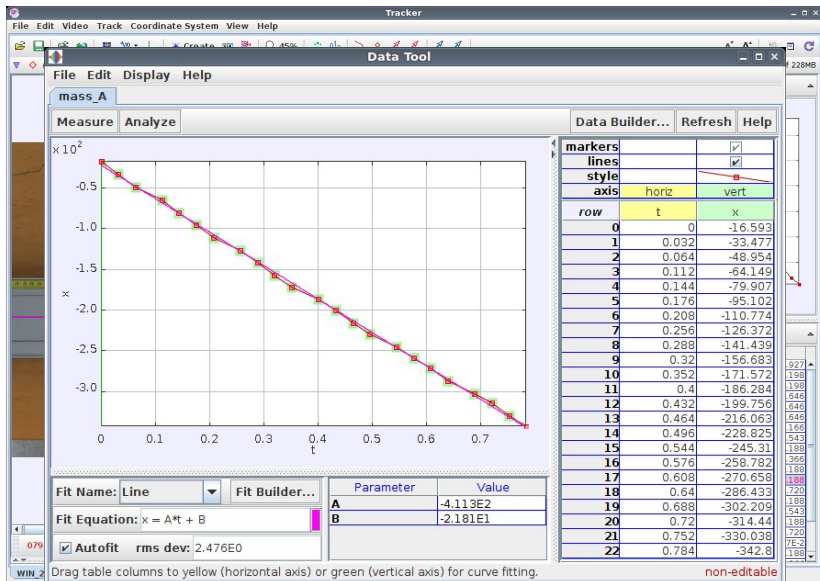


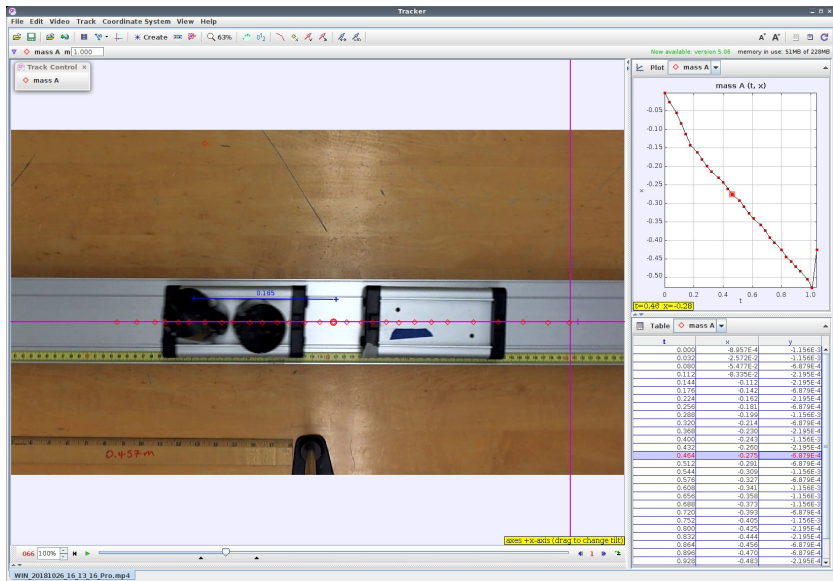


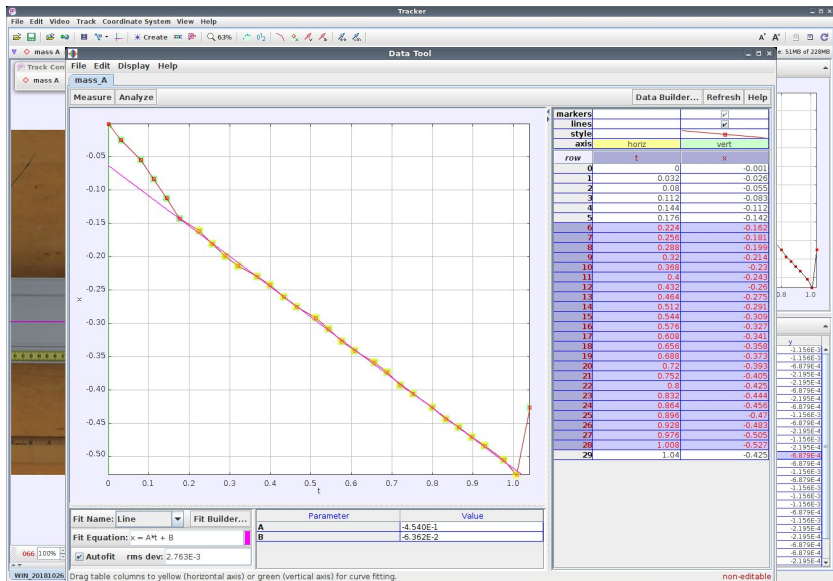


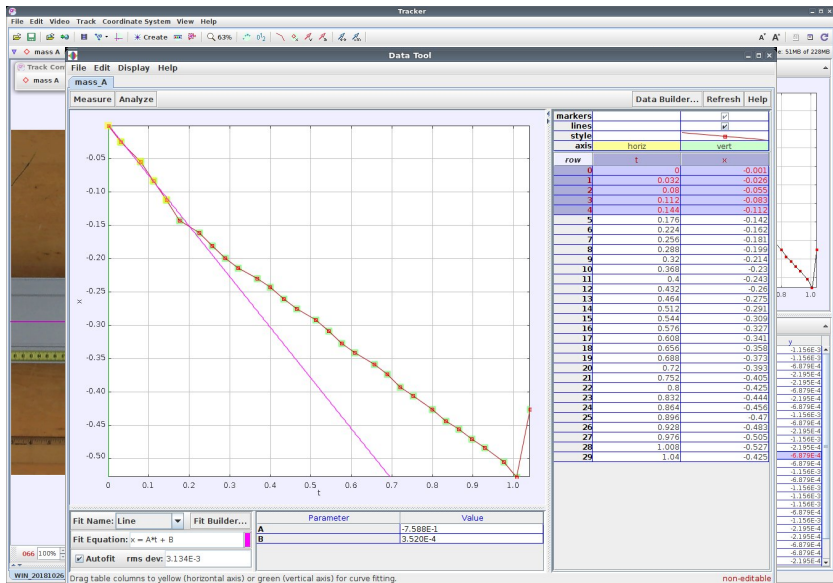












Center-Of-Mass

The image shows a screenshot of the Tracker software interface. The main window displays a video of a man in a classroom holding a long, thin object. Two trajectories are overlaid on the video: a red one and a cyan one. The red trajectory starts at the man's hand, goes up and over the chalkboard, and then down. The cyan trajectory starts at the man's hand, goes up and over the chalkboard, and then down in a different path. A blue double-headed arrow is positioned below the chalkboard. The Tracker interface includes a menu bar (File, Edit, Video, Track, Coordinate System, View, Help), a toolbar with various icons, and a 'Track' window with 'New', 'mass A', and 'mass B' options. A status bar at the bottom shows '124 100%' and a play button. The URL 'youtube.com/analysis2' is visible in the bottom left corner.

Tracker

File Edit Video Track Coordinate System View Help

Track

New mass A mass B

mass B m 1.000 kg

Trajectory of an extended object

124 100%

youtube.com/analysis2